

Rechne aus und markiere die richtige Anzahl an Feldern!

$8 \cdot 9 = \underline{\hspace{2cm}}$


$5 \cdot 7 = \underline{\hspace{2cm}}$


$2 \cdot 8 = \underline{\hspace{2cm}}$



$9 \cdot 7 = \underline{\hspace{2cm}}$


$6 \cdot 6 = \underline{\hspace{2cm}}$

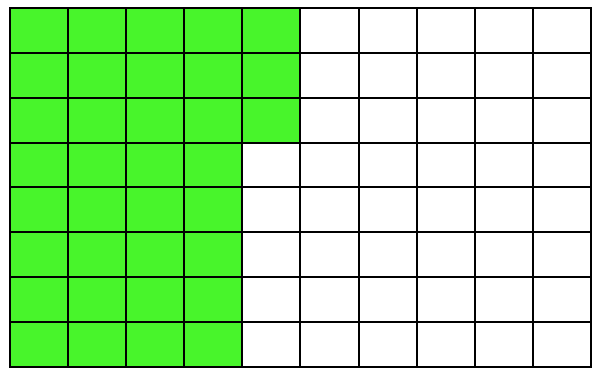

$3 \cdot 3 = \underline{\hspace{2cm}}$


Lösung

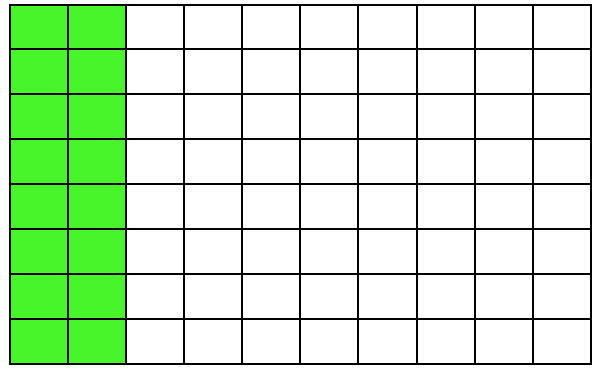
$8 \cdot 9 = 72$



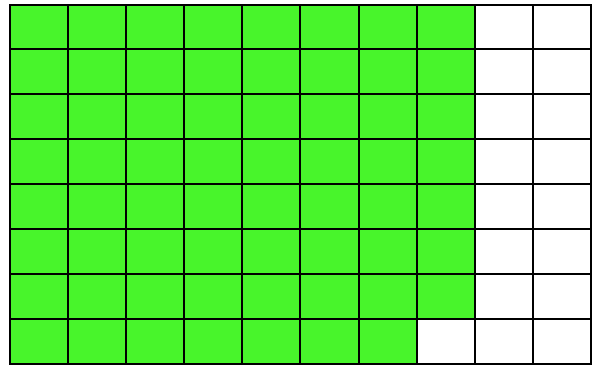
$5 \cdot 7 = 35$



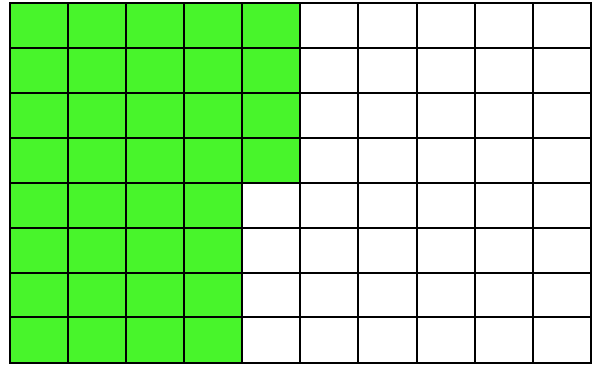
$2 \cdot 8 = 16$



$9 \cdot 7 = 63$



$6 \cdot 6 = 36$



$3 \cdot 3 = 9$

