

Arbeitsblatt für das Fach Mathe

Klasse 2
Einmaleins



Rechne aus und markiere die richtige Anzahl an Feldern!

$3 \cdot 7 = \underline{\hspace{2cm}}$

$6 \cdot 5 = \underline{\hspace{2cm}}$

$9 \cdot 4 = \underline{\hspace{2cm}}$

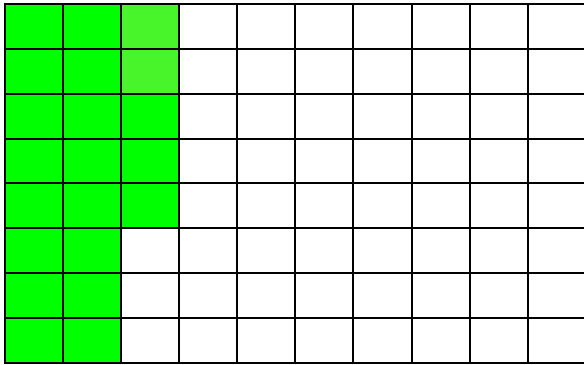
$7 \cdot 8 = \underline{\hspace{2cm}}$

$2 \cdot 9 = \underline{\hspace{2cm}}$

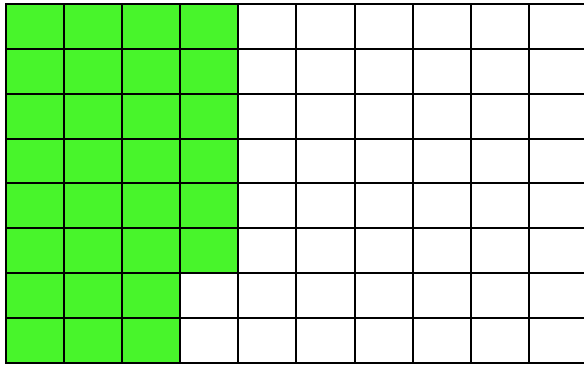
$4 \cdot 6 = \underline{\hspace{2cm}}$

Lösung

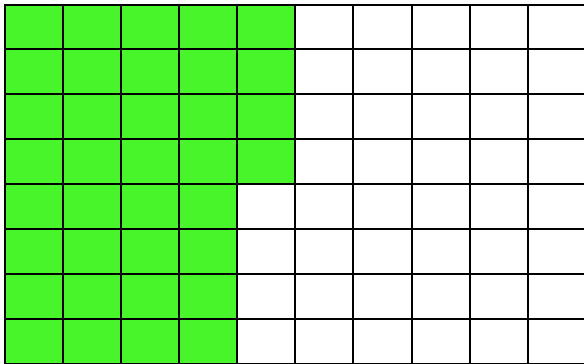
$3 \cdot 7 = 21$




$6 \cdot 5 = 30$




$9 \cdot 4 = 36$



$7 \cdot 8 = 56$



$2 \cdot 9 = 18$



$4 \cdot 6 = 24$

