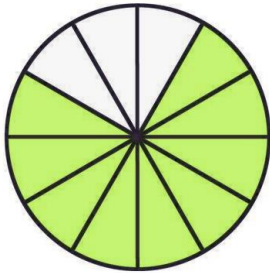
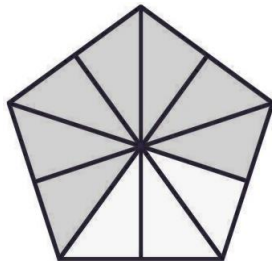

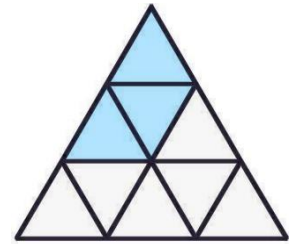



Schreibe die farbige Fläche als einen Bruch des Ganzen!




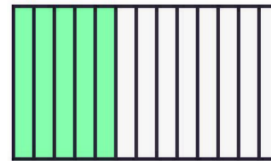


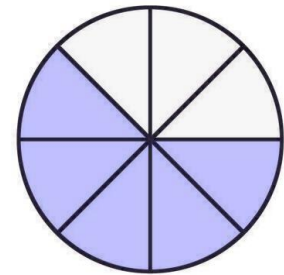


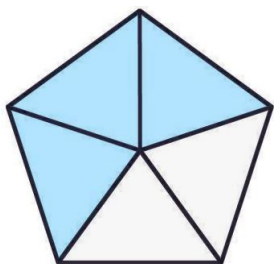


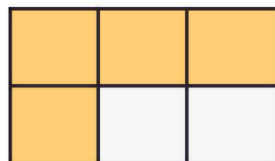


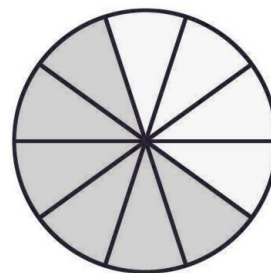


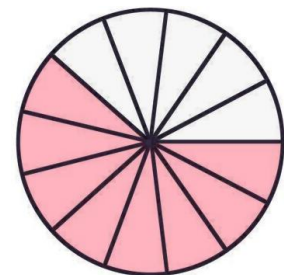












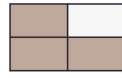
LÖSUNG:



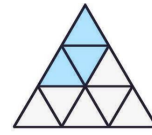
$$\frac{9}{12}$$




$$\frac{7}{10}$$




$$\frac{3}{4}$$



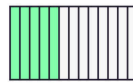
$$\frac{3}{9}$$



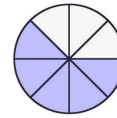
$$\frac{1}{1} = 1$$



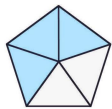
$$\frac{1}{2}$$



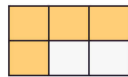
$$\frac{5}{13}$$



$$\frac{5}{8}$$



$$\frac{3}{5}$$



$$\frac{4}{6}$$



$$\frac{6}{10}$$



$$\frac{8}{13}$$