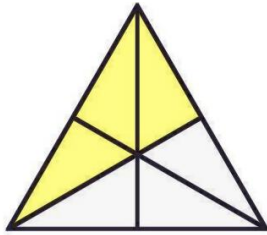
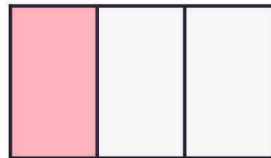


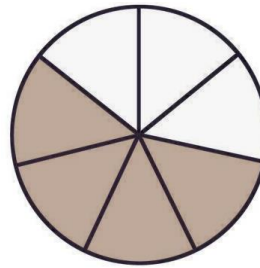
Schreibe die farbige Fläche als einen Bruch des Ganzen!



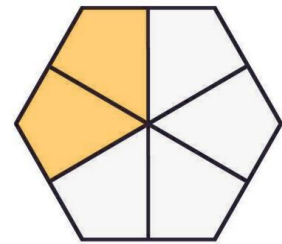
\_\_\_\_\_



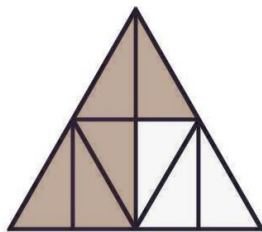
\_\_\_\_\_



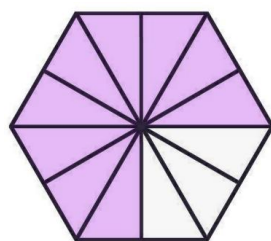
\_\_\_\_\_



\_\_\_\_\_



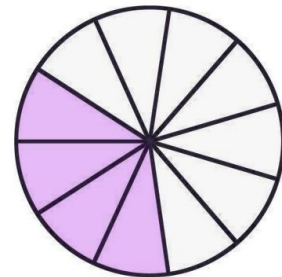
\_\_\_\_\_



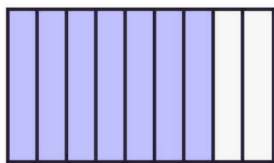
\_\_\_\_\_



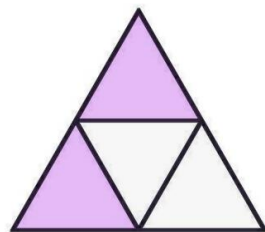
\_\_\_\_\_



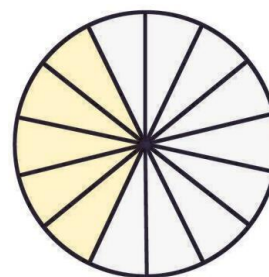
\_\_\_\_\_



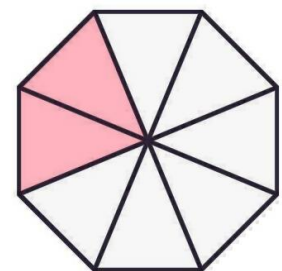
\_\_\_\_\_



\_\_\_\_\_

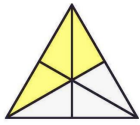


\_\_\_\_\_

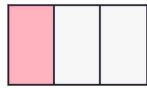


\_\_\_\_\_

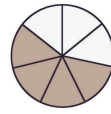
# LÖSUNG:



$$\frac{3}{6}$$



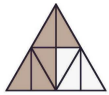
$$\frac{1}{3}$$



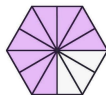
$$\frac{4}{7}$$



$$\frac{2}{6}$$



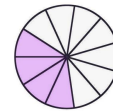
$$\frac{5}{8}$$



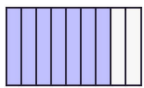
$$\frac{9}{12}$$



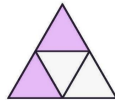
$$\frac{1}{1} = 1$$



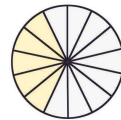
$$\frac{4}{11}$$



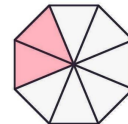
$$\frac{7}{9}$$



$$\frac{2}{4}$$



$$\frac{5}{14}$$



$$\frac{2}{8}$$