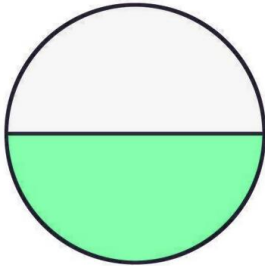
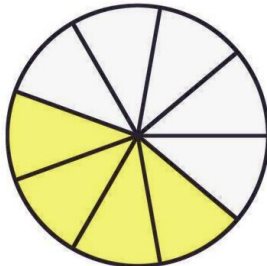

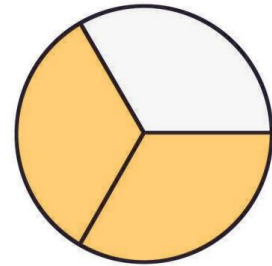


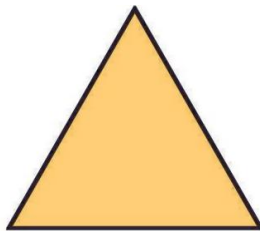
Schreibe die farbige Fläche als einen Bruch des Ganzen!

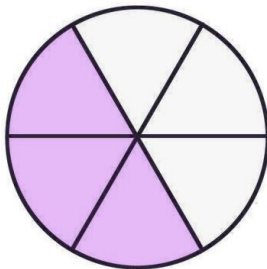




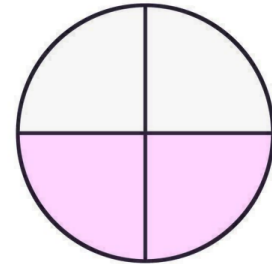


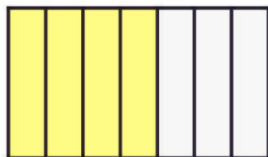


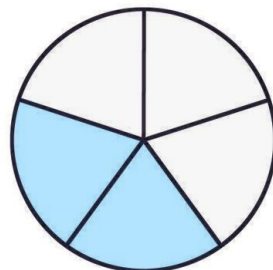





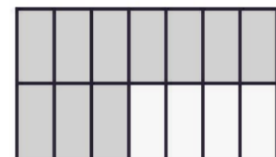




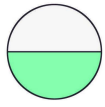




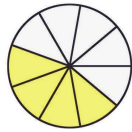




LÖSUNG:



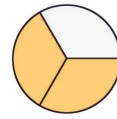
$$\frac{1}{2}$$



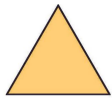
$$\frac{4}{9}$$



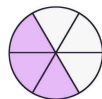
$$\frac{4}{5}$$



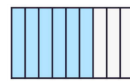
$$\frac{1}{3}$$



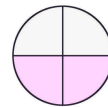
$$\frac{1}{1} = 1$$



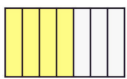
$$\frac{3}{6}$$



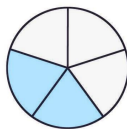
$$\frac{6}{9}$$




$$\frac{2}{4}$$



$$\frac{4}{7}$$



$$\frac{2}{5}$$



$$\frac{3}{4}$$



$$\frac{10}{14}$$