




Berechne und markiere in der Tabelle die richtigen Felder!

$5 \cdot 5 = \underline{\quad}$

$7 \cdot 7 = \underline{\quad}$




$8 \cdot 8 = \underline{\quad}$



$3 \cdot 3 = \underline{\quad}$

$9 \cdot 9 = \underline{\quad}$

$4 \cdot 4 = \underline{\quad}$



Geschafft!




# Lösung

Klasse 2


Einmaleins: Quadratzahl-Aufgaben




$$5 \cdot 5 = 25$$



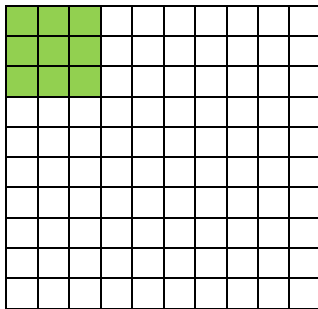
$$7 \cdot 7 = 49$$



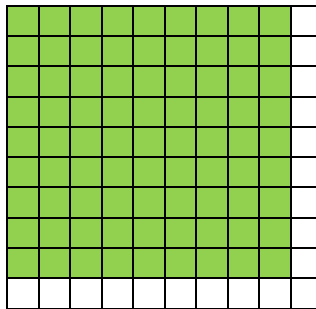
$$8 \cdot 8 = 64$$



$$3 \cdot 3 = 9$$



$$9 \cdot 9 = 81$$



$$4 \cdot 4 = 16$$

