





Berechne und markiere in der Tabelle die richtigen Felder!


$2 \cdot 2 = \underline{\quad}$




$9 \cdot 9 = \underline{\quad}$




$3 \cdot 3 = \underline{\quad}$




$10 \cdot 10 = \underline{\quad}$



$6 \cdot 6 = \underline{\quad}$



$4 \cdot 4 = \underline{\quad}$



Geschafft!



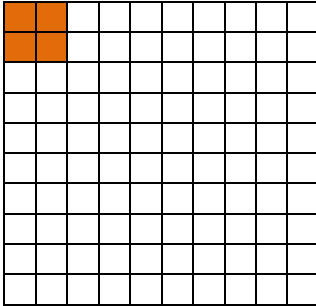
Lösung

Klasse 2

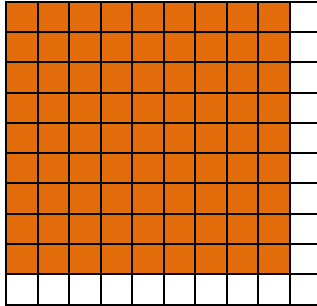
Einmaleins: Quadratzahl-Aufgaben



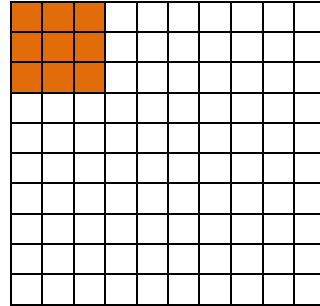
$$2 \cdot 2 = 4$$




$$9 \cdot 9 = 81$$



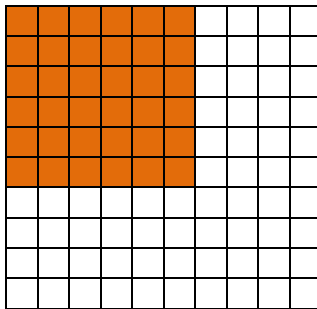
$$3 \cdot 3 = 9$$



$$10 \cdot 10 = 100$$



$$6 \cdot 6 = 36$$



$$4 \cdot 4 = 16$$

