




# Arbeitsblatt für das Fach Mathe

Klasse 2

Zahlenraum 100: Zahlen kennenlernen



Kreise immer die größere Zahl ein!



...65
98
96

.....25
34
45

...18
17
23

.....32
42
22

.....87
77
93


...59
29
69



# Lösung

Klasse 2

Zahlenraum 100: Zahlen kennenlernen



...65

98

96

.....25

34

45

...18

17

23

.....32

42

22

.....87

77

93

...59

29

69

