



Wir üben das Addieren im Zahlenraum bis 5.
Zähle, schreibe auf und rechne!



$$\underline{\quad\quad\quad} + \underline{\quad\quad\quad} = \underline{\quad\quad\quad}$$



$$\underline{\quad\quad\quad} + \underline{\quad\quad\quad} = \underline{\quad\quad\quad}$$



$$\underline{\quad\quad\quad} + \underline{\quad\quad\quad} = \underline{\quad\quad\quad}$$



$$\underline{\quad\quad\quad} + \underline{\quad\quad\quad} = \underline{\quad\quad\quad}$$



$$\underline{\quad\quad\quad} + \underline{\quad\quad\quad} = \underline{\quad\quad\quad}$$

$$1 + 4 = \underline{\quad\quad\quad}$$

$$3 + 1 = \underline{\quad\quad\quad}$$


$$2 + 3 = \underline{\quad\quad\quad}$$

$$0 + 5 = \underline{\quad\quad\quad}$$

$$2 + 2 = \underline{\quad\quad\quad}$$

$$1 + 2 = \underline{\quad\quad\quad}$$

Lösung:



4

+



1

=

5



3


+



2

=

5



2


+



1


=

3



2

+



2

=

4



1

+



1

=

2

$$1 + 4 = 5$$

$$3 + 1 = 4$$

$$2 + 3 = 5$$

$$0 + 5 = 5$$

$$2 + 2 = 4$$

$$1 + 2 = 3$$