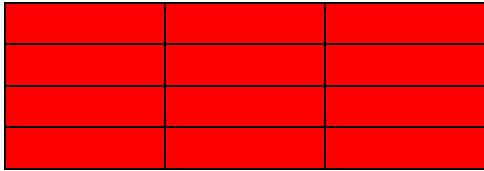



Schreibe die Brüche in Buchstaben im Verhältnis der roten Teile zum Ganzen. Ecris les fractions en utilisant des lettres. Donne le rapport de la partie rouge sur le tout.



\_\_\_\_\_



\_\_\_\_\_



\_\_\_\_\_




\_\_\_\_\_



\_\_\_\_\_



\_\_\_\_\_




\_\_\_\_\_




\_\_\_\_\_



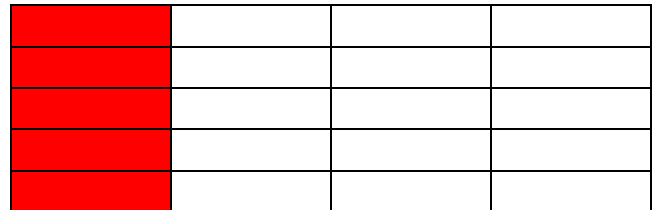
\_\_\_\_\_



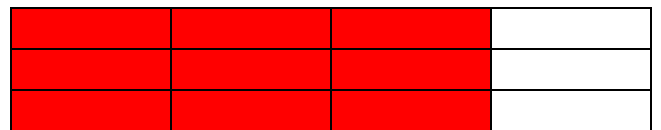

\_\_\_\_\_




\_\_\_\_\_



\_\_\_\_\_



\_\_\_\_\_




**douze douzièmes / un entier**




**deux tiers**




**trois troisièmes / un entier**



**six sixièmes / un entier**



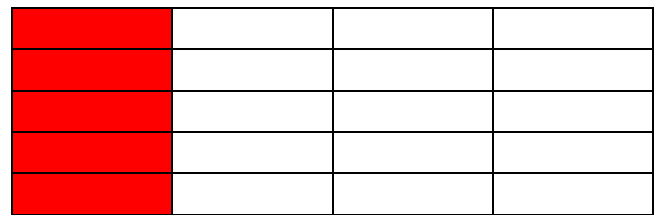
**huit huitièmes / un entier**



**sept dixièmes**



**quatre quatrièmes / un entier**





**cinq vingtièmes**



**deux deuxièmes / deux demis / un entier**




**un demi**



**un entier**



**trois entiers un tiers**



**un tiers**