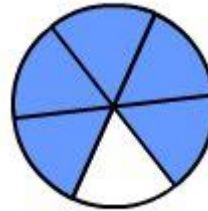


Welche Bruchzahl stellt die Figur dar?
Quelle fraction la figure représente-t-elle ?
Schreibe die Bruchzahlen der Lösung in Buchstaben dahinter.



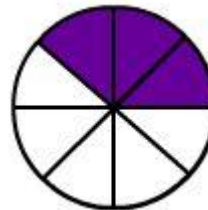
- A: $1/2$
- B: $3/8$
- C: $3/4$
- D: $4/3$



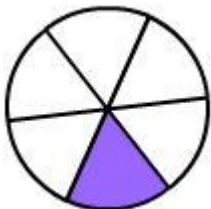
- A: $1/6$
- B: $6/1$
- C: $5/4$
- D: $5/6$



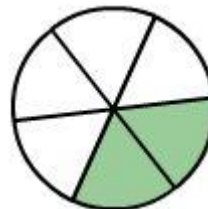
- A: $4/8$
- B: $1/8$
- C: $3/8$
- D: $8/4$



- A: $3/8$
- B: $8/3$
- C: $1/3$
- D: $3/4$



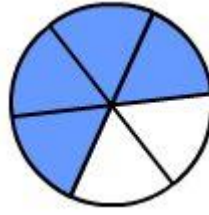
- A: $6/1$
- B: $5/6$
- C: $1/6$
- D: $3/6$



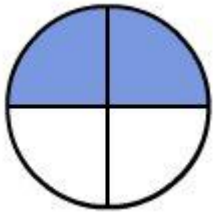
- A: $2/4$
- B: $1/2$
- C: $2/6$
- D: $1/6$



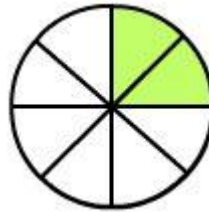
-
- A: $\frac{3}{8}$
 - B: $\frac{5}{8}$
 - C: $\frac{1}{8}$
 - D: $\frac{8}{5}$



-
- A: $\frac{4}{6}$
 - B: $\frac{1}{3}$
 - C: $\frac{2}{6}$
 - D: $\frac{6}{4}$



-
- A: $\frac{2}{4}$
 - B: $\frac{4}{2}$
 - C: $\frac{4}{4}$
 - D: $\frac{3}{4}$

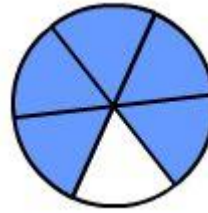


-
- A: $\frac{1}{8}$
 - B: $\frac{2}{8}$
 - C: $\frac{3}{8}$
 - D: $\frac{8}{2}$



trois quarts

- A: $1/2$
 B: $3/8$
 C: $3/4$
 D: $4/3$



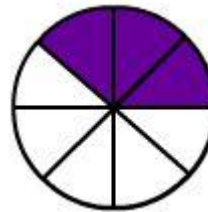
cinq sixièmes

- A: $1/6$
 B: $6/1$
 C: $5/4$
 D: $5/6$



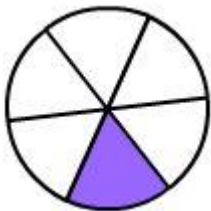
quatre huitièmes

- A: $4/8$
 B: $1/8$
 C: $3/8$
 D: $8/4$



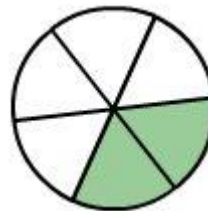
trois huitièmes

- A: $3/8$
 B: $8/3$
 C: $1/3$
 D: $3/4$



un sixième

- A: $6/1$
 B: $5/6$
 C: $1/6$
 D: $3/6$



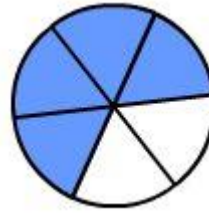
deux sixièmes

- A: $2/4$
 B: $1/2$
 C: $2/6$
 D: $1/6$



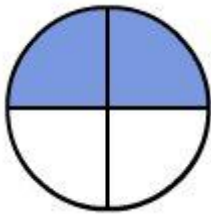
cinq huitièmes

- A: $\frac{3}{8}$
- B: $\frac{5}{8}$
- C: $\frac{1}{8}$
- D: $\frac{8}{5}$



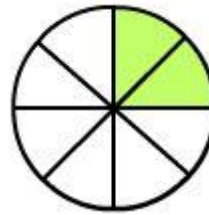
quatre sixièmes

- A: $\frac{4}{6}$
- B: $\frac{1}{3}$
- C: $\frac{2}{6}$
- D: $\frac{6}{4}$



deux quarts

- A: $\frac{2}{4}$
- B: $\frac{4}{2}$
- C: $\frac{4}{4}$
- D: $\frac{3}{4}$



deux huitièmes

- A: $\frac{1}{8}$
- B: $\frac{2}{8}$
- C: $\frac{3}{8}$
- D: $\frac{8}{2}$