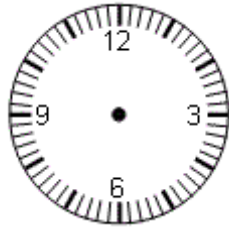


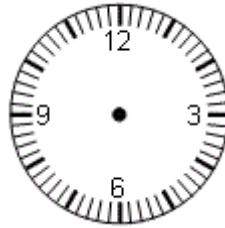


Füge die Zeiger hinzu. (Ajoute les aiguilles.)

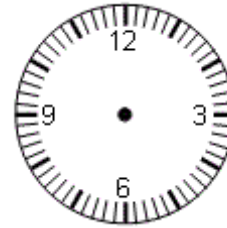
dix-huit heures et quart



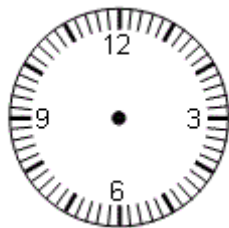
midi et quart



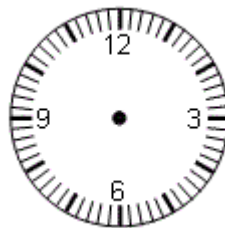
cinq heures et quart



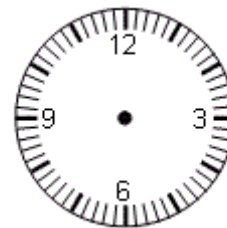
quatre heures moins le quart



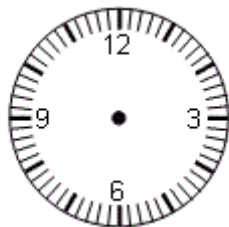
vingt-et-une heures moins le quart



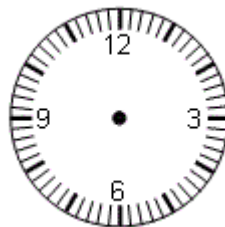
quinze heures quarante-cinq



quatre heures moins le quart



vingt-et-une heures moins le quart



quinze heures quarante-cinq

